

## PITAM SE, PITAM



Ovo se pitam ja:  
je li veće  
jedan ili dva?

– To se barem zna:  
veće je dva.

– Stani, polako,  
je li baš tako?

Jedan korak lava,  
il' dva koraka mrava?



Jedna stopa lisice  
il' dvije stope vjeverice?

Tko ima nos  
da otkrije štos?

## ŠALJIVI ZADACI

Ovdje upiši slovo koje stoji pored  
odgovarajućeg rješenja iz ključa.

1. Devetero braće,  
a jedne gaće?

2. Četvero braće  
po jednu sestru  
ima. Koliko je  
ukupno djece?

3. Koka i po' za dan  
snese jaje i po'.  
Koliko je jaja koka  
sama snijela za tri dana?

4. Koliko je to:  
u tri tanjura  
po par krumpira?


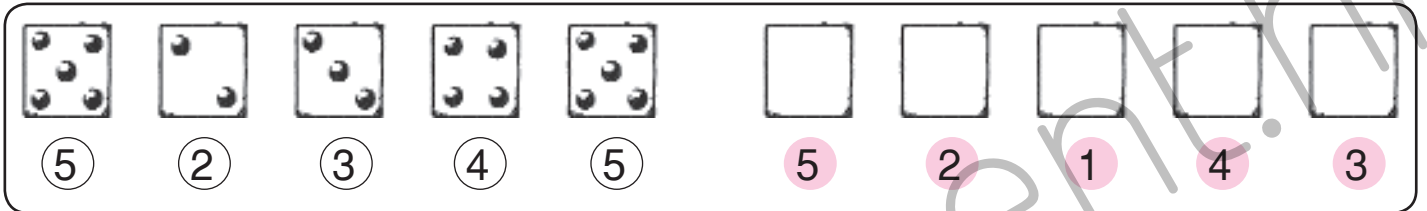
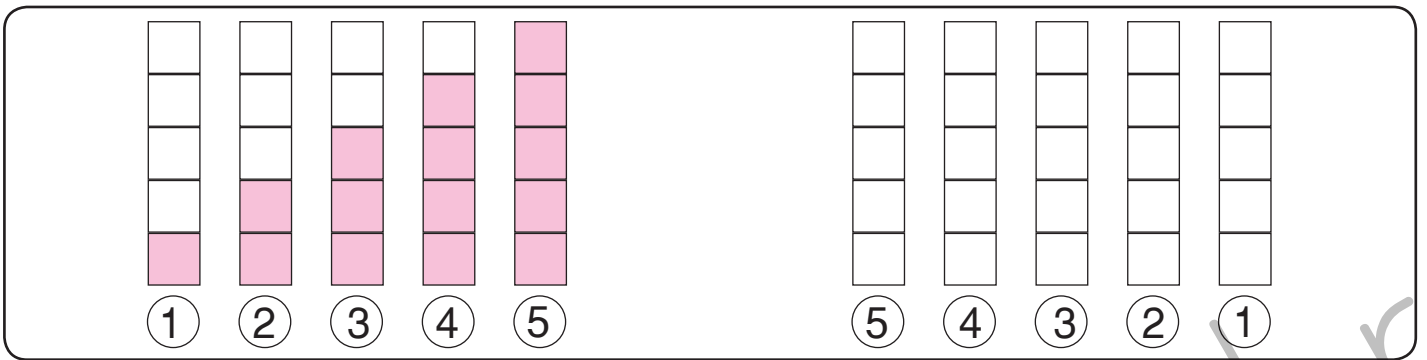
5. Četiri trčuljka  
stalno su blizu,  
niti se sastaju,  
niti se stižu.



🔑 Rješenja za šaljive zadatke

TRI	O
DESET	T
PETERO	K
KOTAČI NA AUTOMOBILU	A
JEDAN	Z
GRAH U MAHUNI	Š
ŠEST	L
KOŠARA	V
OSMERO	G





U prazne kružiće upiši koliko je čega na slici.  
Pronađi polja s tim brojevima i oboji ih. Dobit ćeš zanimljivu sliku.




1 = CRVENA

2 = ŽUTA




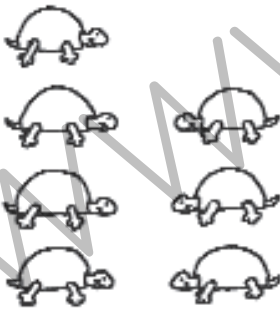


3 = PLAVA

4 = ZELENA

## ŠTO JE VEĆE, ŠTO JE MANJE?



Upiši znakove koji nedostaju.

3  22  12  34  33  43  14  5

Za svako > i < koje si dobio oboji po jedno polje odgovarajućom bojom. Ako si točno riješio, dobit ćeš lijepu sliku.



&gt; ŽUTA

&lt; CRVENA

Koliko je cvjetova?



$2 + 1 =$

$2 + 2 =$

$3 + 1 =$

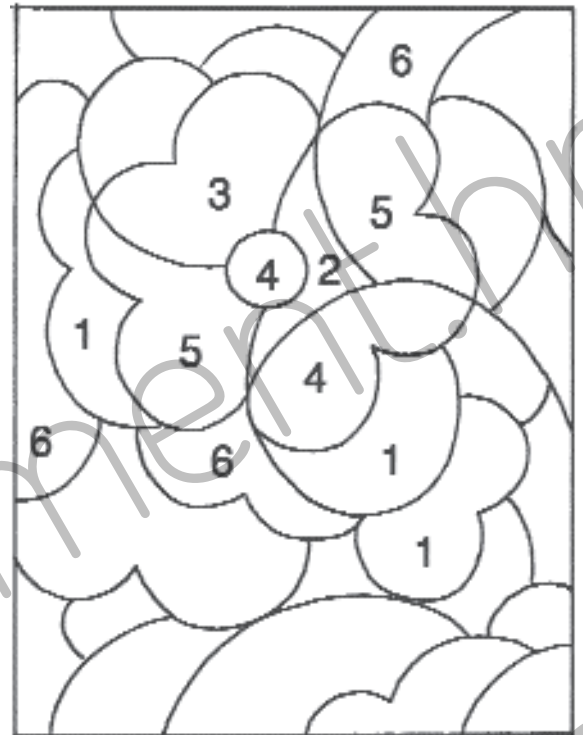


$+ =$

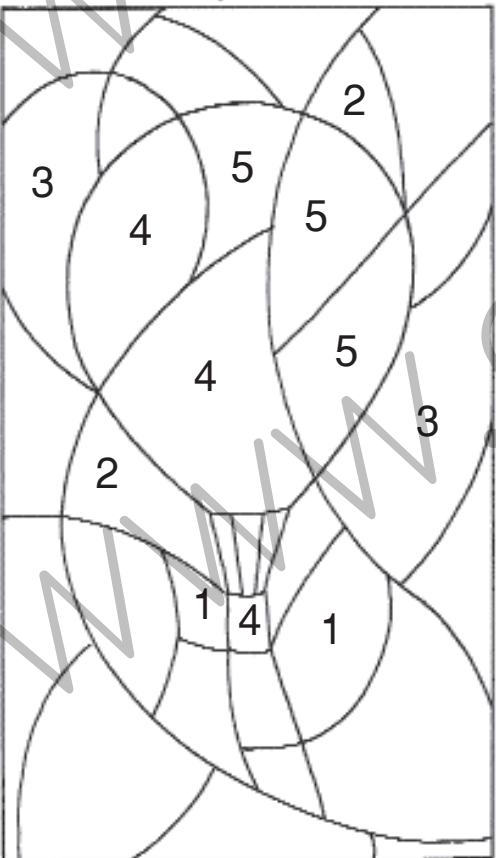
$+ =$

$+ =$

Polja s rješenjima  
zbrojeva oboji jednom bojom.



Polja s rješenjima  
zbrojeva oboji jednom bojom.



Koliko je balona?



$2 + 2 =$

$3 + 1 =$

$3 + 2 =$



$+ =$

$+ =$

$+ =$



$1 + 1 = \bigcirc$

$2 + 2 = \bigcirc$

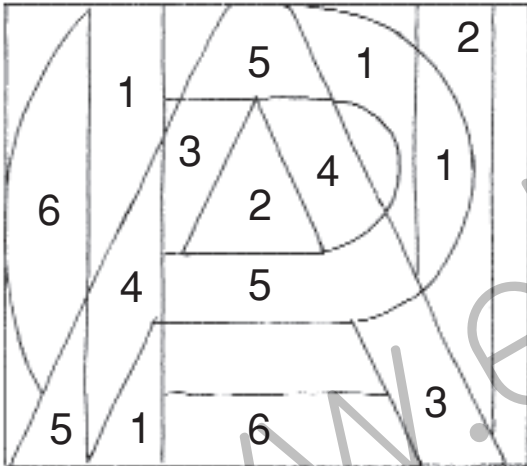
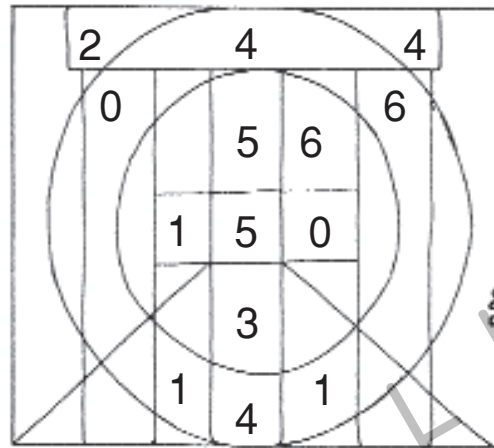
$3 + 1 = \bigcirc$

$3 + 2 = \bigcirc$

$4 + 1 = \bigcirc$

$3 + 0 = \bigcirc$

$4 + 0 = \bigcirc$



$1 + 2 = \bigcirc$

$1 + 3 = \bigcirc$

$1 + 4 = \bigcirc$

$2 + 3 = \bigcirc$

$0 + 4 = \bigcirc$

$0 + 5 = \bigcirc$

$0 + 3 = \bigcirc$

$2 + \bigcirc = 3$

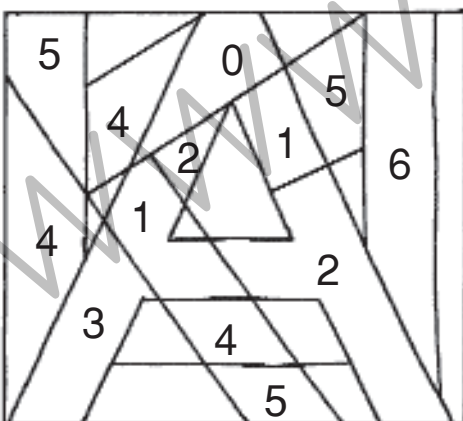
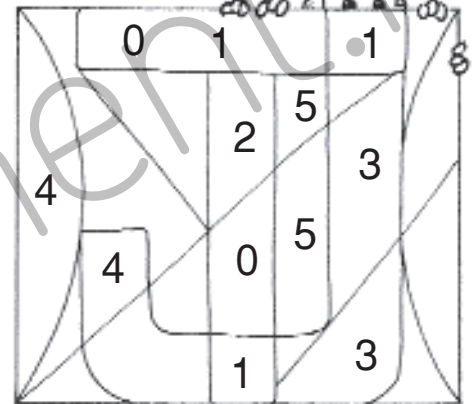
$3 + \bigcirc = 4$

$3 + \bigcirc = 5$

$4 + \bigcirc = 4$

$4 + \bigcirc = 5$

$3 + \bigcirc = 3$



$\bigcirc + 1 = 3$

$\bigcirc + 2 = 4$

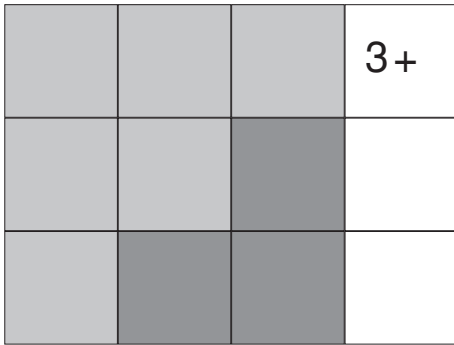
$\bigcirc + 2 = 5$

$\bigcirc + 3 = 4$

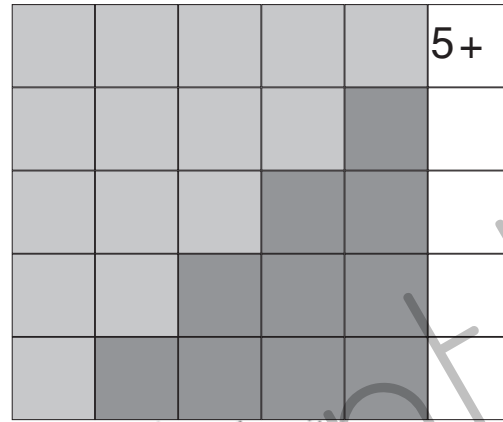
$\bigcirc + 4 = 5$

$\bigcirc + 3 = 3$

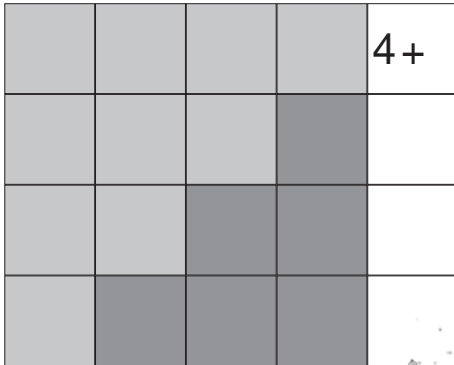
Odredi pribrojnike.



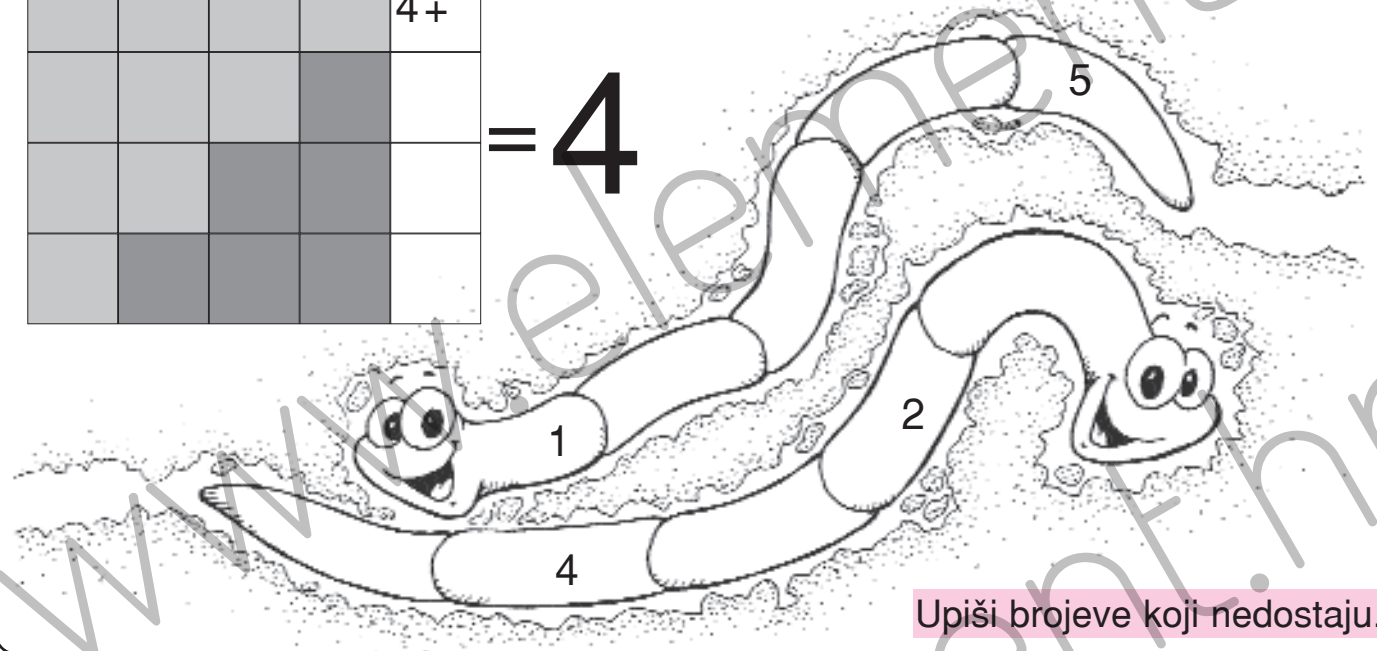
= 3



= 5



= 4



Upiši brojeve koji nedostaju.

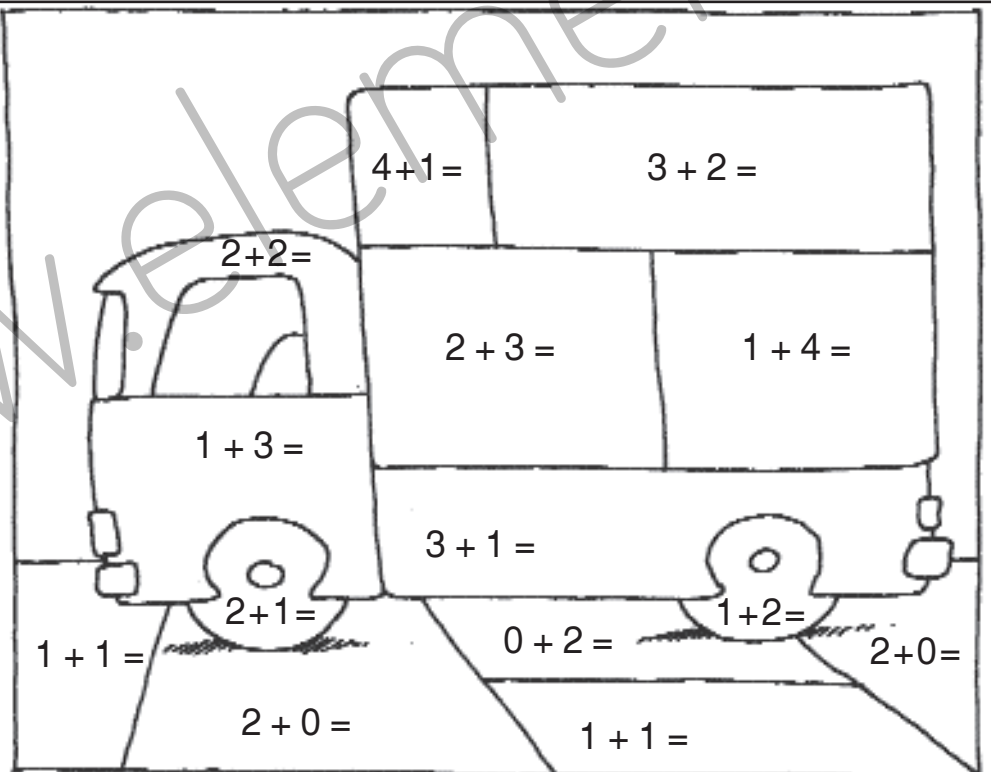
Izračunaj i oboji svako polje bojom koja odgovara zbroju.

2 = PLAVA

3 = CRNA

4 = CRVENA

5 = ŽUTA



2 - 1 =

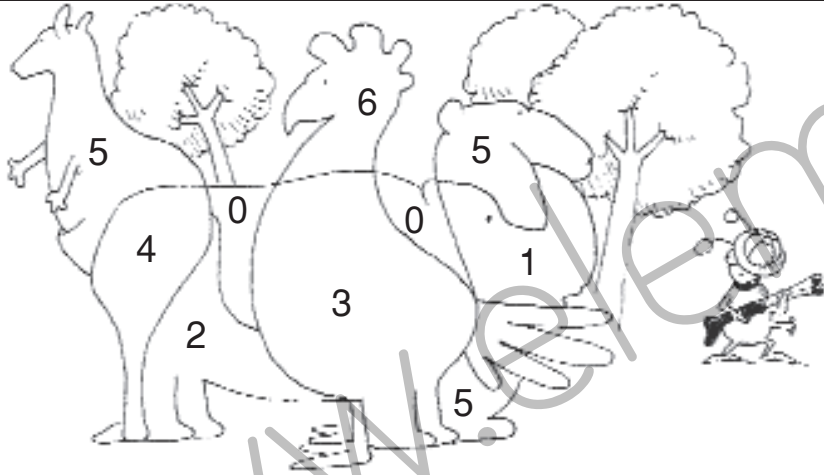

3 - 1 =

3 - 2 =

4 - 1 =

4 - 2 =

4 - 4 =



5 - 1 =

5 - 2 =

5 - 4 =

5 - 3 =

3 - 3 =

5 - 5 =

3 -  = 2

3 -  = 1

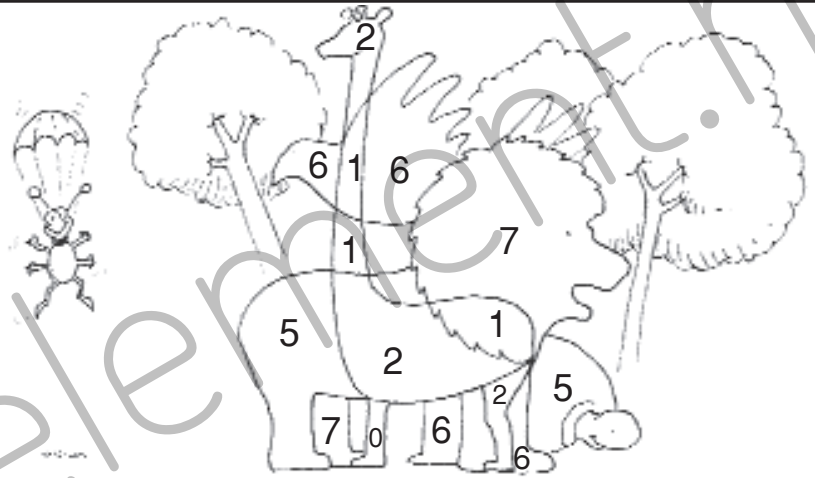
4 -  = 3

4 -  = 2

5 -  = 4

5 -  = 3

5 -  = 5



- 1 = 1

- 1 = 2


- 2 = 2


- 3 = 1

- 2 = 3

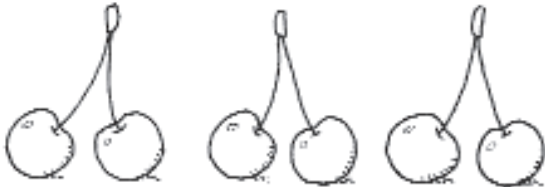
- 3 = 2

- 0 = 5

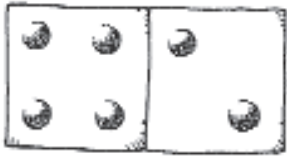




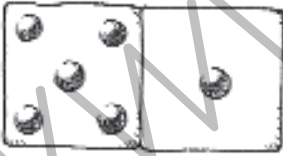
$$\square + \square = 6$$



$$\square + \square + \square = 6$$



$$\square + \square = 6$$

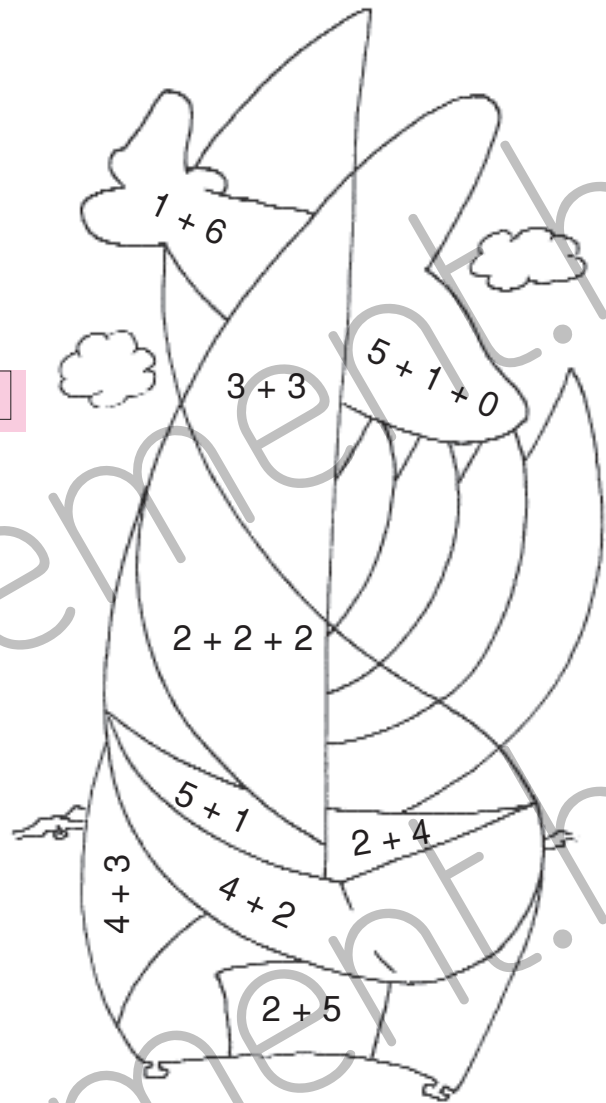


$$\square + \square = 6$$



$$\square + \square = 6$$

Oboji polja s brojevima koje si dobio i otkrit ćeš sliku.



$5+1=$

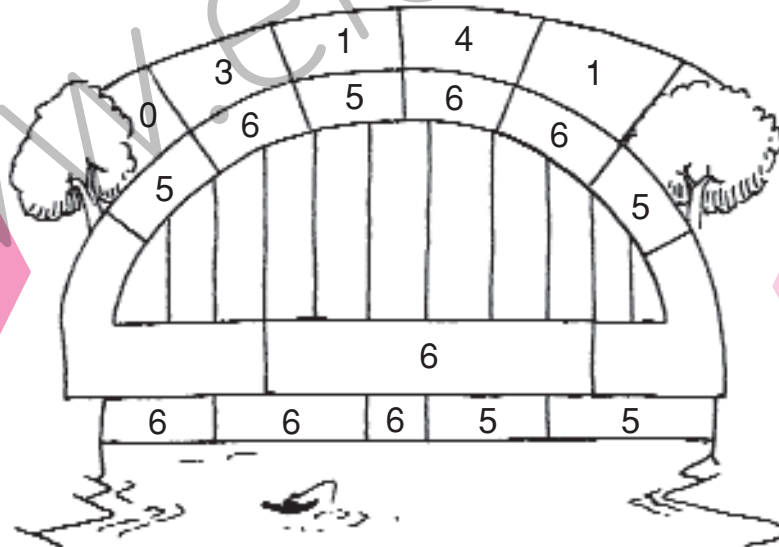
$4+1=$

$3+3=$

$3+2=$

$4+2=$

$5+0=$



$1+5=$

$2+3=$

$2+4=$

$0+6=$

$0+5=$

$3+3=$