

IME I PREZIME: \_\_\_\_\_

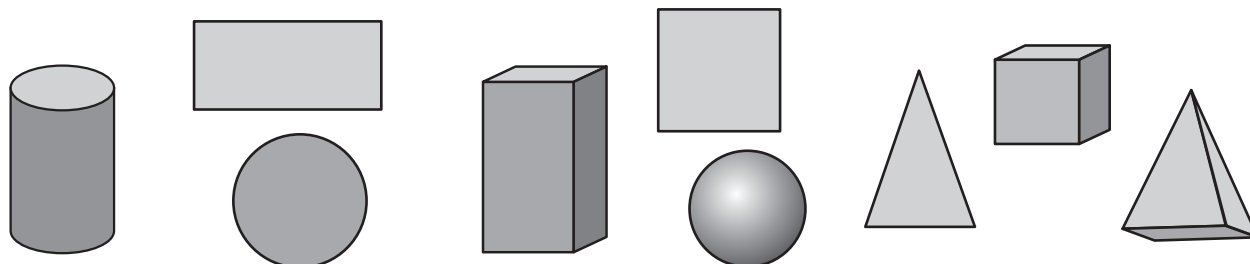
RAZRED: \_\_\_\_\_

## 1. ISPIT ZNANJA

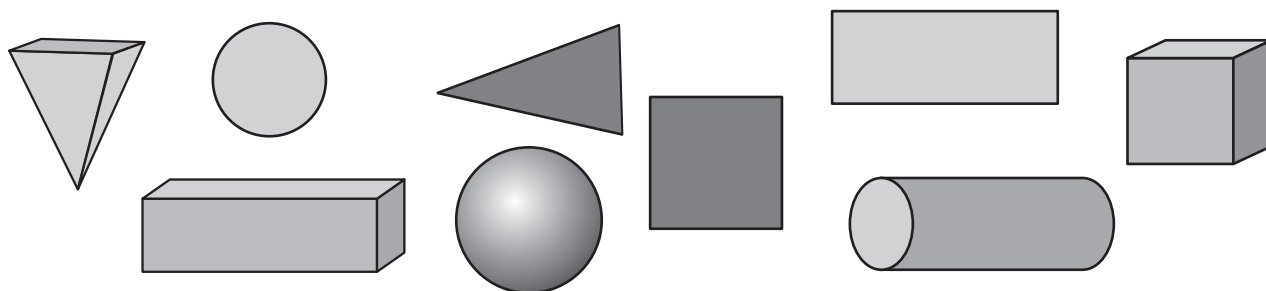
### GEOMETRIJSKA TIJELA I PLOHE. GEOMETRIJSKI LIKOVİ

# A

#### 1. PREKRIŽI GEOMETRIJSKA TIJELA.



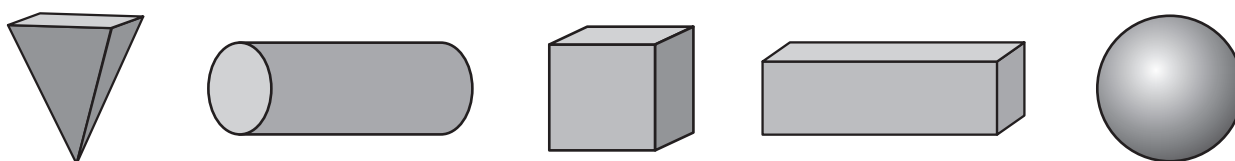
#### 2. PREKRIŽI GEOMETRIJSKE LIKOVE.




#### 3. OBOJI RAVNU PLOHU VALJKA.



#### 4. PREKRIŽI VALJAK I KUGLU.



#### 5. PREKRIŽI KVADAR, KOCKU I PIRAMIDU.



NADNEVAK: \_\_\_\_\_

BILJEŠKA UČITELJA/ICE: \_\_\_\_\_

IME I PREZIME: \_\_\_\_\_


RAZRED: \_\_\_\_\_

## 1. ISPIT ZNANJA

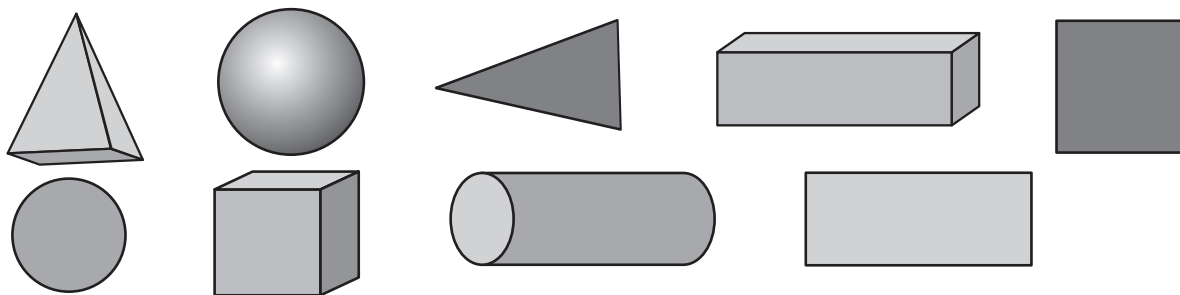
# B

### GEOMETRIJSKA TIJELA I PLOHE. GEOMETRIJSKI LIKOVİ


1. PREKRIŽI GEOMETRIJSKE LIKOVE.



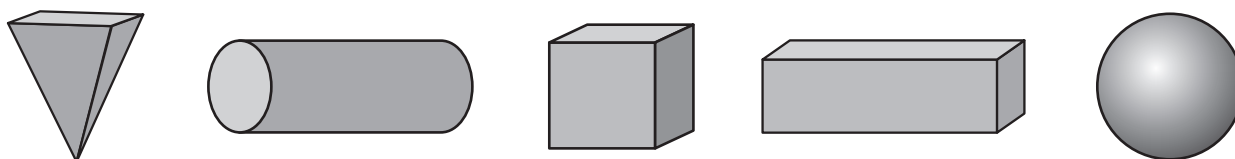
2. PREKRIŽI GEOMETRIJSKA TIJELA.



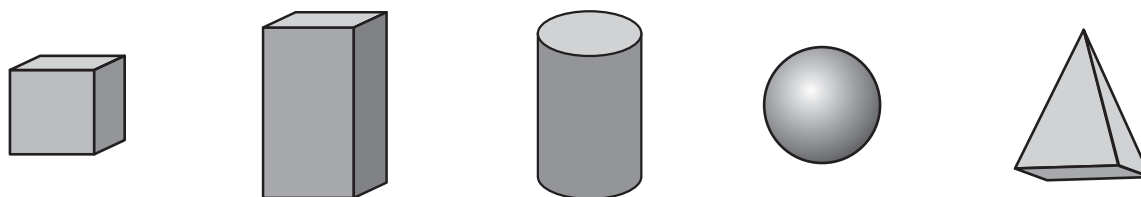
3. OBOJI ZAKRIVLJENU PLOHU VALJKA.



4. PREKRIŽI PIRAMIDU, KOCKU I KVADAR.



5. PREKRIŽI VALJAK I KUGLU.



NADNEVAK: \_\_\_\_\_

BILJEŠKA UČITELJA/ICE: \_\_\_\_\_

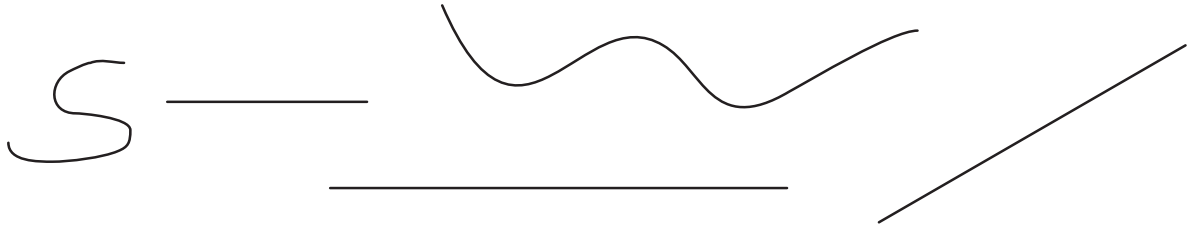
IME I PREZIME: \_\_\_\_\_ RAZRED: \_\_\_\_\_

## 2. ISPIT ZNANJA

### CRTA I TOČKA. ODNOSI MEĐU PREDMETIMA

# A

1. PREKRIŽI RAVNE CRTE.



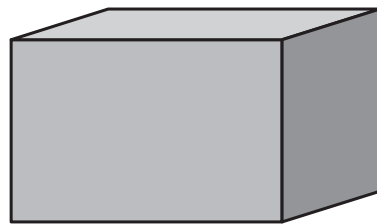
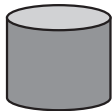
2. NACRTAJ ZAKRIVLJENU CRTU.

3. TOČKE A I B SPOJI RAVNOM CRTOM.

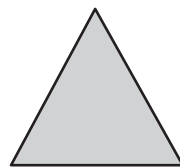
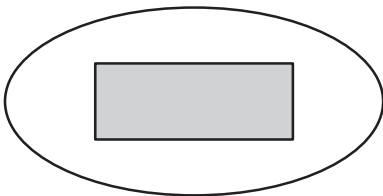
A

B

4. PREKRIŽIJ VEĆE GEOMETRIJSKO TIJELO.



5. PREKRIŽI GEOMETRIJSKI LIK KOJI SE NALAZI UNUTAR CRTE.



NADNEVAK: \_\_\_\_\_ BILJEŠKA UČITELJA/ICE: \_\_\_\_\_

IME I PREZIME: \_\_\_\_\_

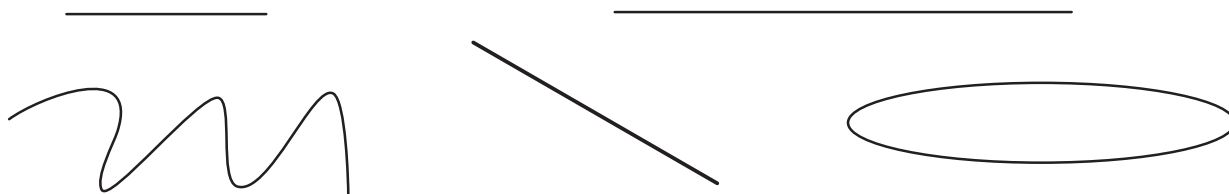
RAZRED: \_\_\_\_\_

## 2. ISPIT ZNANJA

### CRTA I TOČKA. ODNOSI MEĐU PREDMETIMA

# B

1. PREKRIŽI ZAKRIVLJENE CRTE.




2. NACRTAJ RAVNU CRTU.

3. TOČKE A I B SPOJI ZAKRIVLJENOM CRTOM.

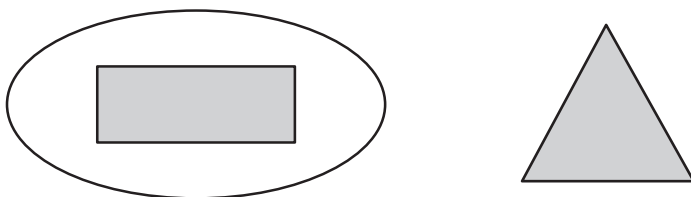
A

B

4. PREKRIŽI VIŠE GEOMETRIJSKO TIJELO.



5. PREKRIŽI GEOMETRIJSKI LIK KOJI SE NALAZI IZVAN CRTE.



NADNEVAK: \_\_\_\_\_

BILJEŠKA UČITELJA/ICE: \_\_\_\_\_

IME I PREZIME: \_\_\_\_\_

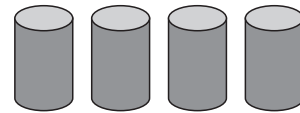
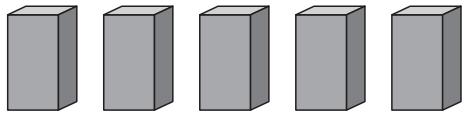
RAZRED: \_\_\_\_\_

### 3. ISPIT ZNANJA

#### BROJEVI OD JEDAN DO PET

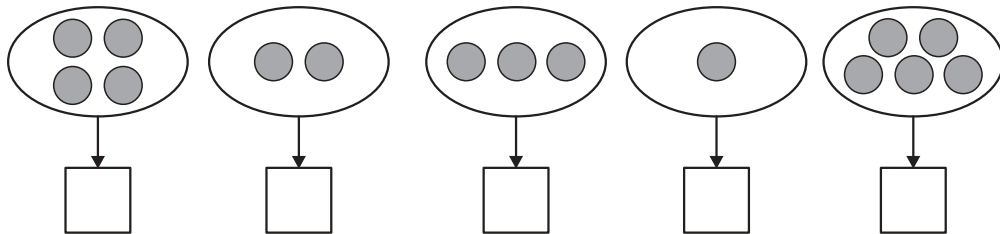
# A

1. IMA LI VIŠE KVADARA ILI VALJAKA?

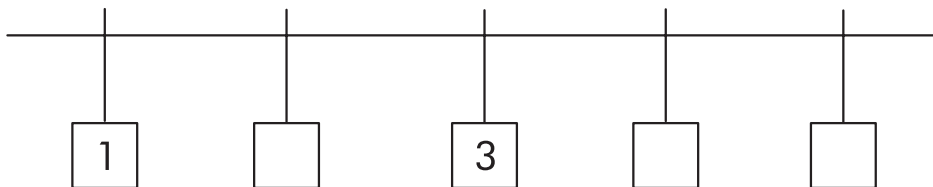


ODGOVORI: VIŠE IMA \_\_\_\_\_.

2. U KVADRATE UPIŠI TRAŽENE BROJEVE.



3. U KVADRATE UPIŠI TRAŽENE BROJEVE.



4. U KRUGOVE UPIŠI JEDAN OD ZNAKOVA:  $>$ ,  $<$  ILI  $=$ .

$3 \bigcirc 1$

$1 \bigcirc 3$

$2 \bigcirc 2$

$5 \bigcirc 4$

$4 \bigcirc 5$

$2 \bigcirc 4$

5. KOLIKO IMA PRSTIJU NA RUCI?

ODGOVORI: NA RUCI IMA  PRSTIJU.

6.

$\overset{\circ}{A}$



$\overset{\circ}{B}$

TOČKE A I B SPOJI ZAKRIVLJENOM CRTOM TAKO DA ONA SIJEČE  
NACRTANU RAVNU CRTU U 5 TOČKA.

NADNEVAK: \_\_\_\_\_ BILJEŠKA UČITELJA/ICE: \_\_\_\_\_