

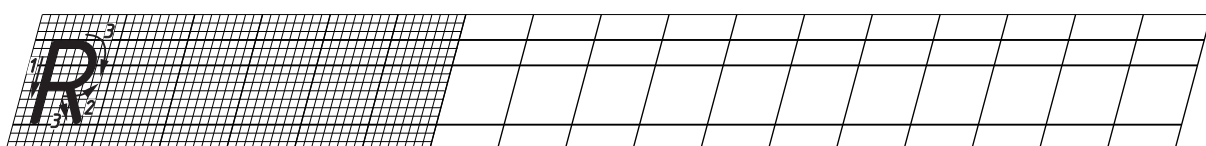
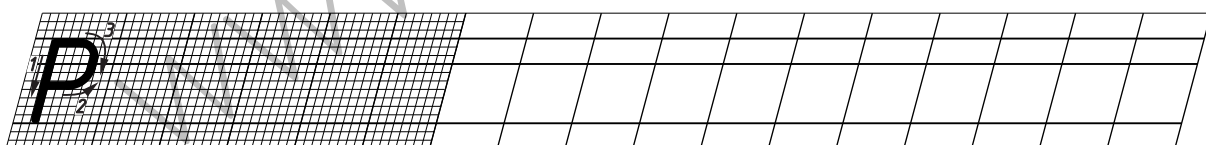
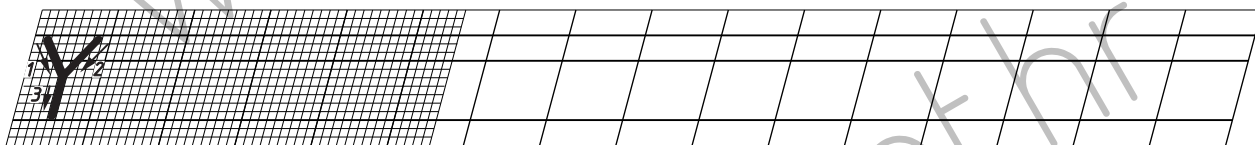
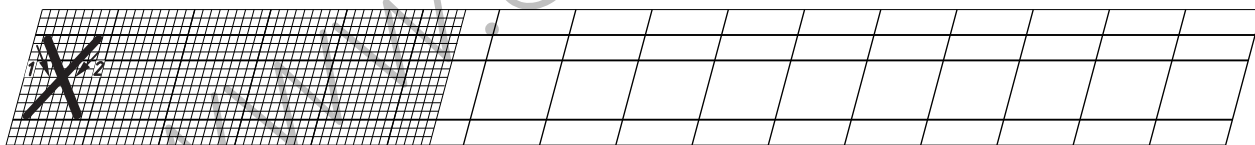
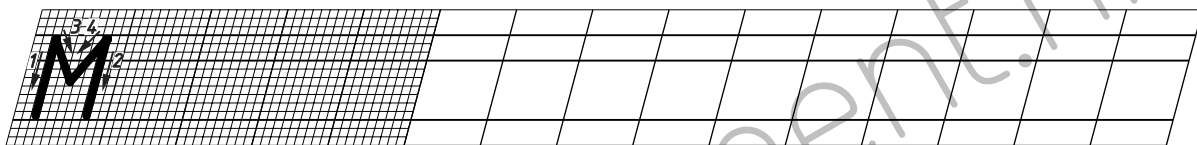
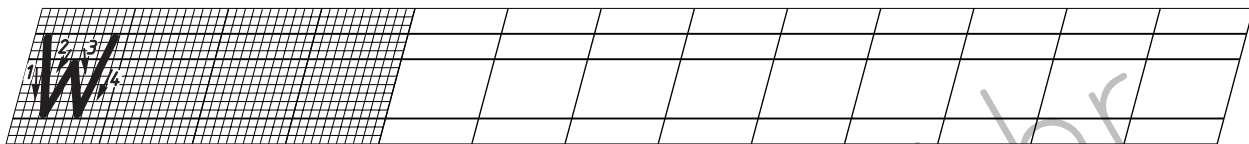
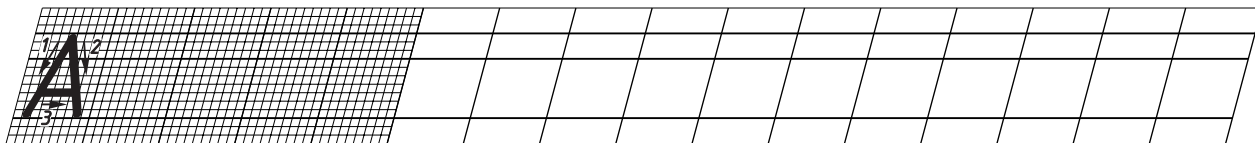
Radna bilježnica - TEHNIČKO CRTANJE I DOKUMENTIRANJE

Tema

Norme za izradu
tehničkog crteža

Nastavna
jedinica

Tehničko pismo



Ime i prezime učenika

Razred/grupa:

Datum:

Stranica 6

Nastavnik:

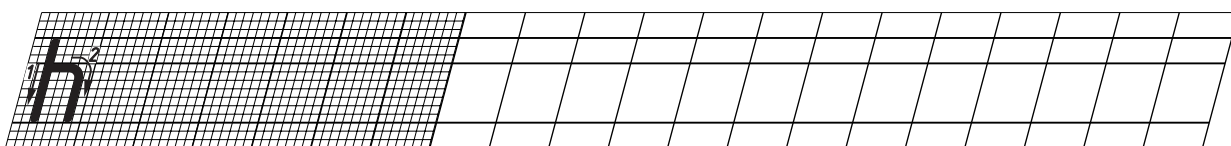
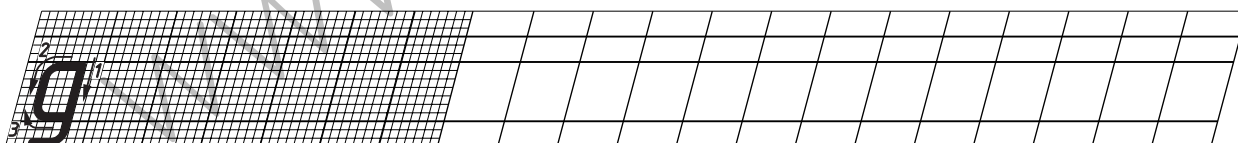
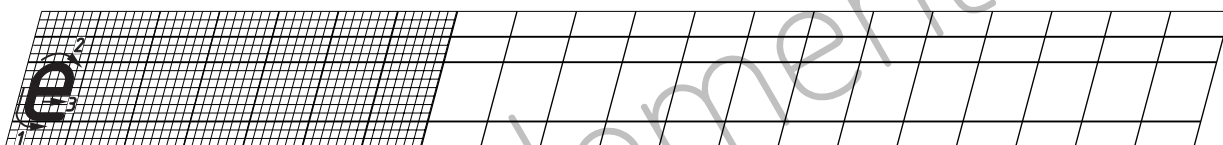
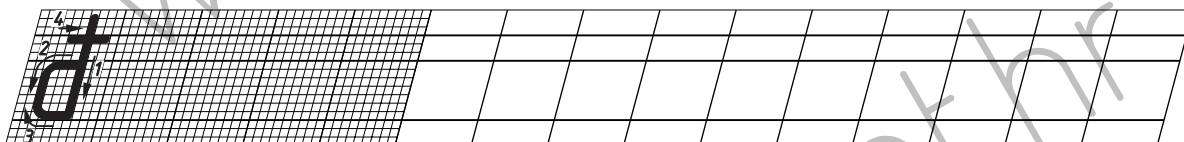
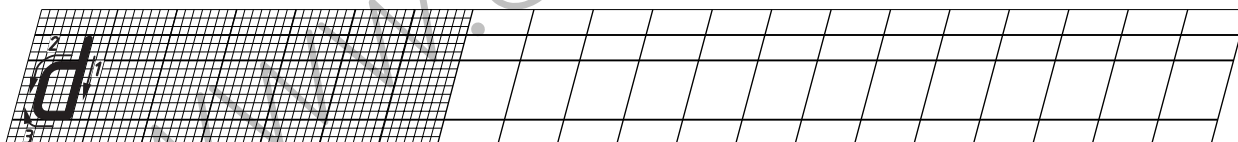
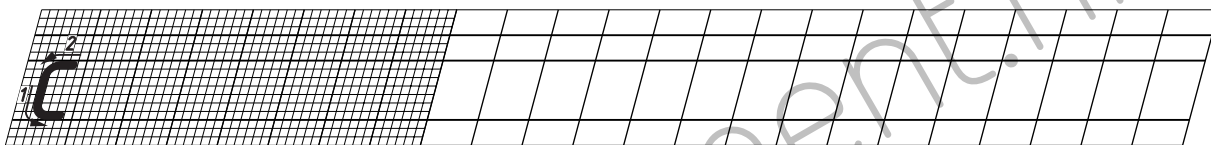
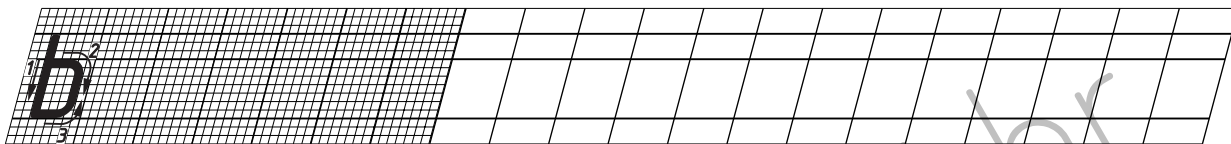
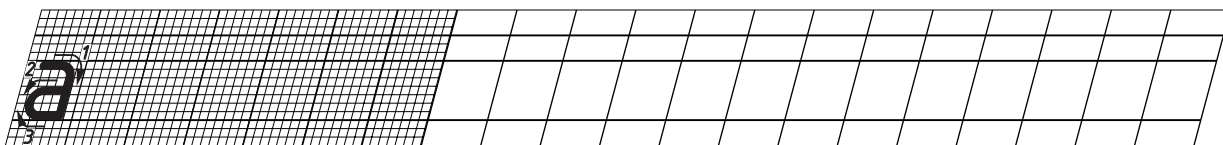
Radna bilježnica - TEHNIČKO CRTANJE I DOKUMENTIRANJE

Tema

Norme za izradu
tehničkog crteža

Nastavna
jedinica

Tehničko pismo



Ime i prezime učenika

Razred/grupa:

Datum:

Stranica 8

Nastavnik:

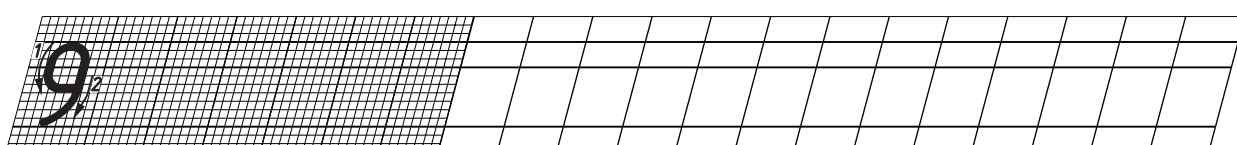
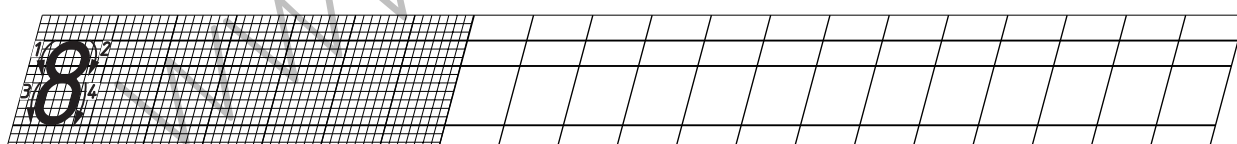



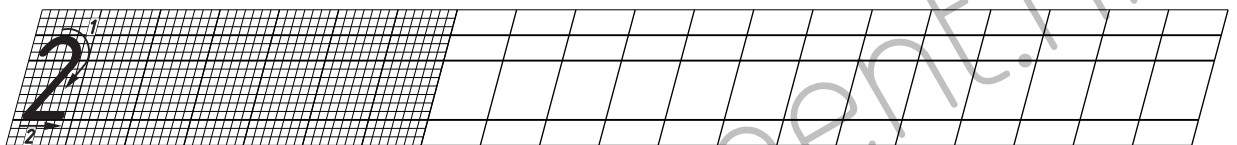
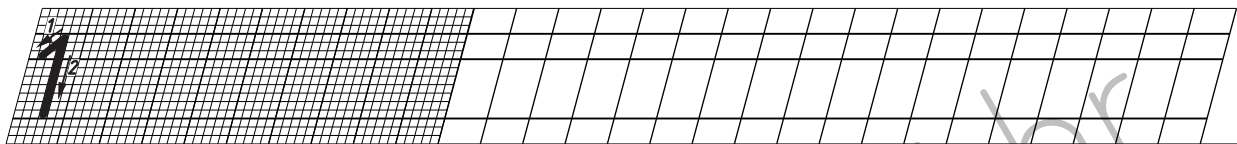
Radna bilježnica - TEHNIČKO CRTANJE I DOKUMENTIRANJE

Tema

Norme za izradu
tehničkog crteža

Nastavna
jedinica

Tehničko pismo



Ime i prezime učenika

Razred/grupa:

Datum:

Stranica 11

Nastavnik:

Radna bilježnica - TEHNIČKO CRTANJE I DOKUMENTIRANJE

Tema

Osnovne geometrijske
konstrukcije

Nastavna
jedinica

Podjela dužine i
mjerilo

Zadatak

Osnovicu trokuta $AB = 100$ mm podjeli na deset jednakih djelova, te konstruiraj raznostraničan trokut ABC ako je stranica AC 80 mm, a BC 70 mm.

Unutar zadanog trokuta nacrtaj isti trokut u mjerilu 1 : 5 u zajedničkom vrhu A .



Ime i prezime učenika

Razred/grupa:

Datum:

Stranica 12

Nastavnik:

Radna bilježnica - TEHNIČKO CRTANJE I DOKUMENTIRANJE

Tema

Tehničke krivulje

Nastavna
jedinica

Zavojnica

Zadatak

Konstruiraj jedan zavoje desne dvovojne zavojnice ako je promjer valjaka 32 mm, a uspon zavojnice 10 mm.

www.element.hr

www.element.hr

Ime i prezime učenika

Razred/grupa:

Datum:

Stranica 13

Nastavnik:

Radna bilježnica - TEHNIČKO CRTANJE I DOKUMENTIRANJE

Tema

Tehničke krivulje

Nastavna
jedinica

Sinusoida

Zadatak

Konstruiraj sinusoidu ako je promjer kružnice 40 mm za osam jednakih podjela kružnice

www.element.hr

Ime i prezime učenika

Razred/grupa:

Datum:

Stranica 14

Nastavnik: